



DM-Lecture 7

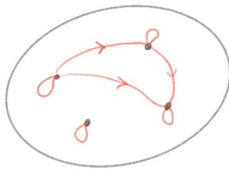


Save and Exit

Align Quiz to Standard

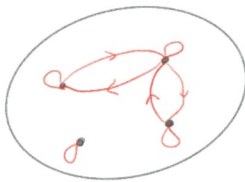
Share

1. Check all that applies. Is this relation



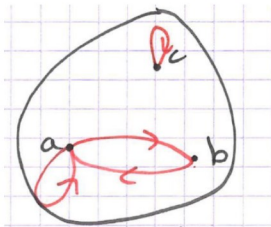
- A reflexive?
- B transitive?
- C symmetric?
- D None of these?

2. Check all that applies. Is this relation



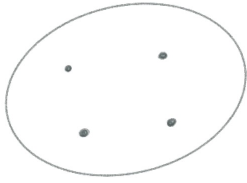
- A reflexive?
- B transitive?
- C symmetric?
- D None of these?

3. Check all that applies. Is this relation



- A reflexive?
- B transitive?
- C symmetric?
- D None of these?

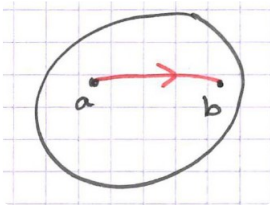
4. Check all that applies. Is this relation



- A reflexive?
- B transitive?
- C symmetric?
- D None of these?



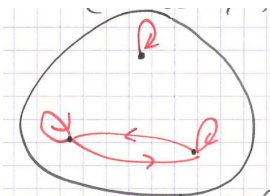
5. Check all that applies. Is this relation



- A reflexive?
- B transitive?
- C symmetric?
- D None of these?



6. Check all that applies. Is this relation



- A reflexive?
- B transitive?
- C symmetric?
- D None of these?



Add a Question

Multiple Choice

True / False

Short Answer